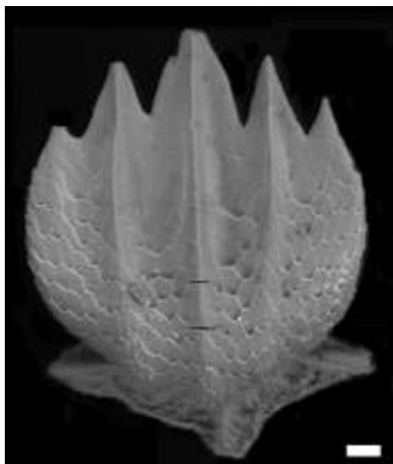


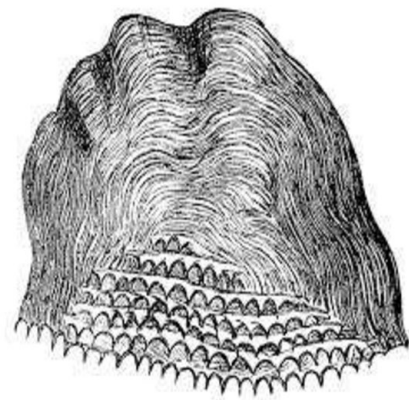
North Bengal University
Practical Exam 2020
Subject: Zoology
Course: B.Sc. (Hons) Semester IV
CC 8- Comparative Anatomy of Vertebrates (Lab)

Full Marks: 20

-
1. Identify the following specimens A and B with reasons. Draw labelled diagrams of the specimen. (5×2= 10 marks)



A



B

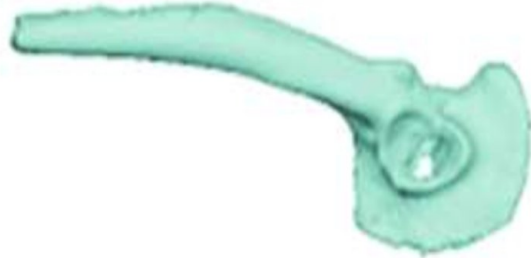
(Continued..)

2. Identify the following specimens with reasons.

(2.5×4= 10)



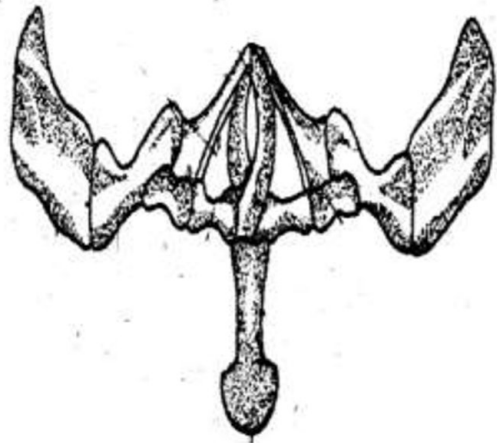
i)



ii)



iii)



iv)
